


Mesures 3


Séance 20

→ **Mesure** chaque segment.


$[AB] = \dots \text{ cm}$



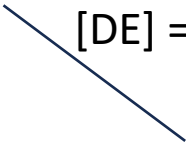
$[BC] = \dots \text{ cm}$




$[CD] = \dots \text{ cm}$



$[DE] = \dots \text{ cm}$



$[EF] = \dots \text{ cm}$



→ **Trace** un segment de la longueur donnée.

$[AB] = 7 \text{ cm}$



A

$[BC] = 3 \text{ cm}$



B

$[CD] = 10$



C

$[DE] = 5 \text{ cm}$



D